

11+ Non-Verbal Reasoning Practice Paper 2

30 minutes

Instructions:

You have 30 minutes to complete 40 questions
Work out the answers carefully and quickly
Use any extra time to check your answers

11+

Date:

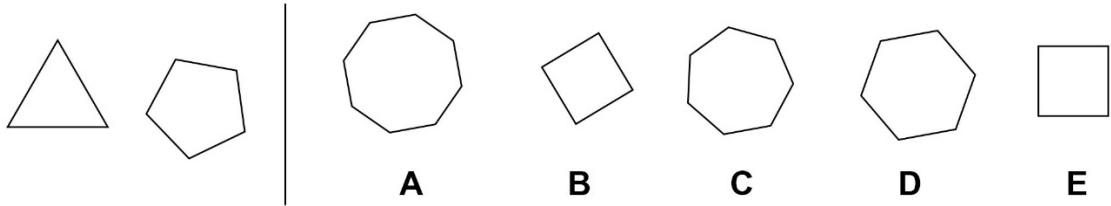
Score:



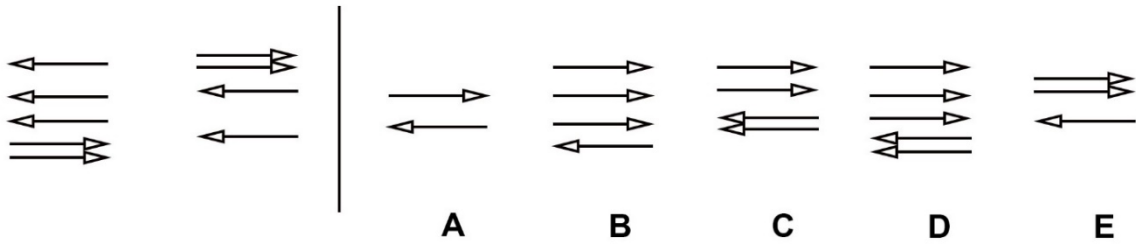
SECTION 1 - SIMILARITIES

Which of the shapes or patterns on the right hand side is similar to the shapes and patterns on the left hand side?

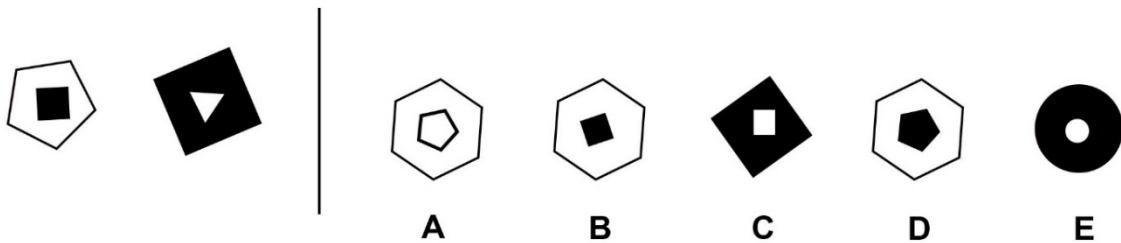
1)



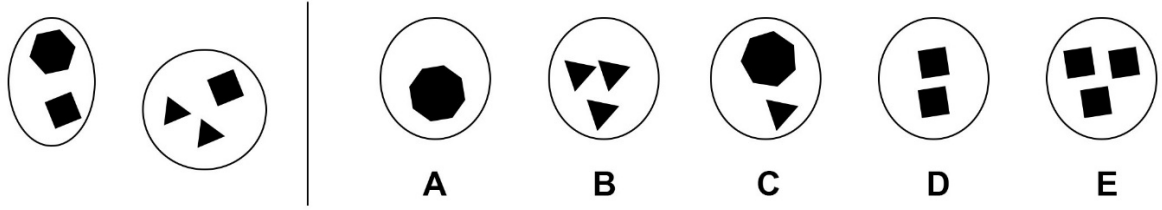
2)



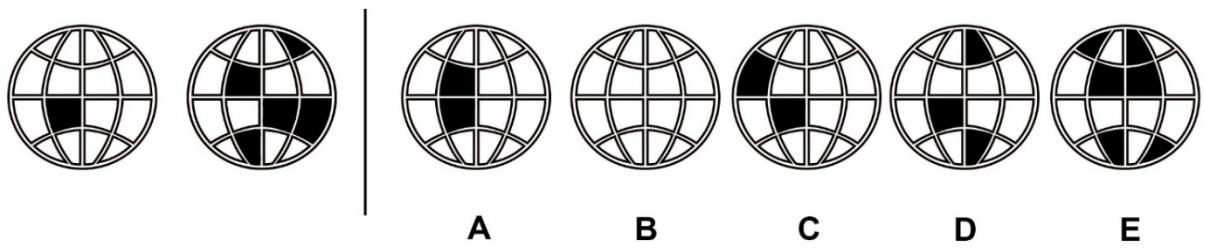
3)



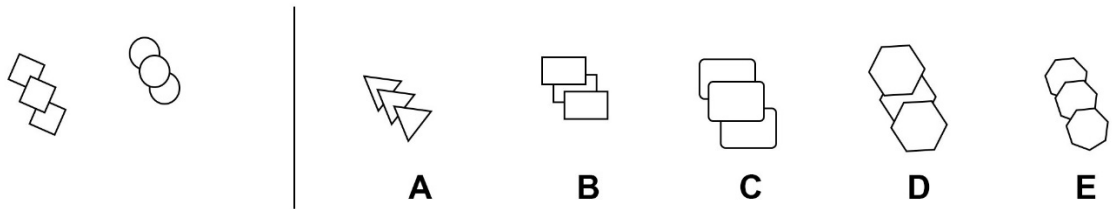
4)



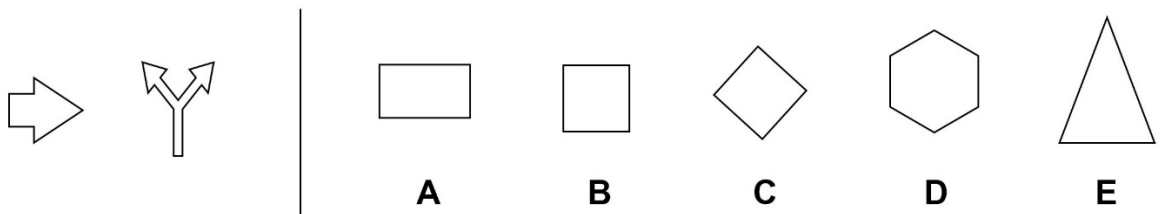
5)



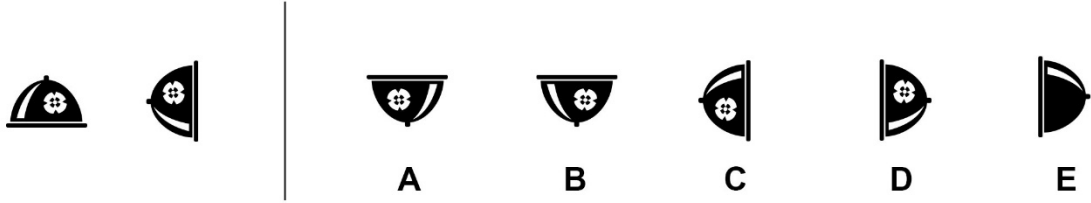
6)



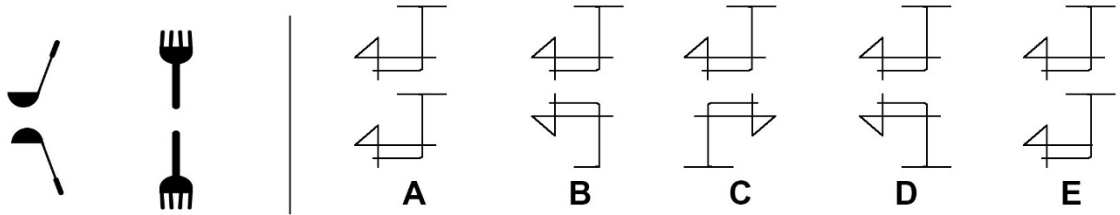
7)



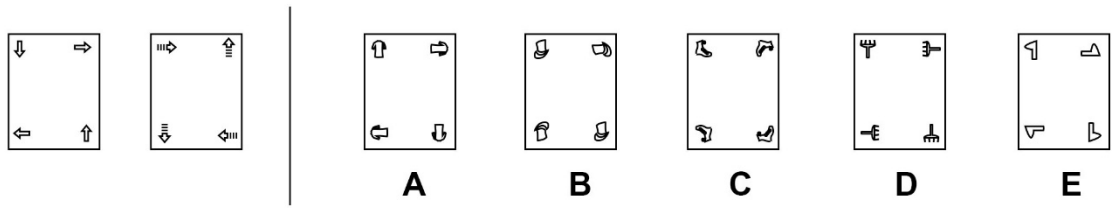
8)



9)








10)








SECTION 2 - HORIZONTAL CODES

Underneath each picture, shape or pattern are two letters. Each letter represents a code which represents the picture, shape or pattern above in some way. Work out the correct code for the shape on the right hand side.











11)

						AG	BF	DF	CF	DG
AF	BG	CG	DG		?	A	B	C	D	E


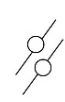


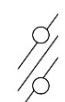
12)

						CF	CG	BJ	AJ	CJ
AF	BG	CH	DG		?	A	B	C	D	E










13)

						MP	LP	LQ	OP	NQ
						A	B	C	D	E
LP	MQ	NP	OQ		?					






14)

						RX	RW	SX	TV	TW
RV	SW	TX	SV		?	A	B	C	D	E

15)

						DJ	DK	DD	CJ	CK
						A	B	C	D	E
CJ	DK	CK	CJ		?					






16)

						AS	AR	BT	BS	BR
AR	BS	AT	AS		?	A	B	C	D	E






17)

						FN	FM	JL	JN	KM
FL	JM	KN	JL		?	A	B	C	D	E






18)

						NR	MR	OP	MQ	OQ
MP	NP	NQ	OR		?	A	B	C	D	E

19)

						FY	HY	GY	GZ	HX
FW	GX	FY	HZ		?	A	B	C	D	E

20)

						BF	CF	DF	AE	AF
AF	BE	CE	DE		?	A	B	C	D	E

SECTION 3 – ODD ONE OUT

Which picture is the odd one out?


21)



A



B



C




D

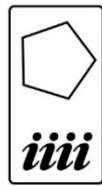


E

22)



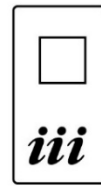
A



B



C

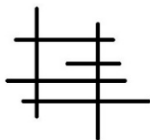


D

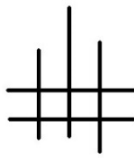


E

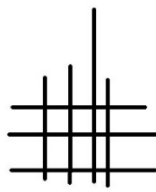
23)



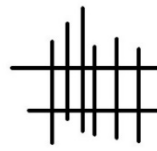
A



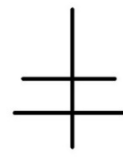
B



C



D



E

24)



A



B



C



D



E

25)



A



B



C



D



E

26)



A



B



C

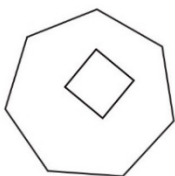


D

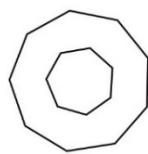


E

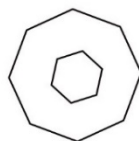
27)



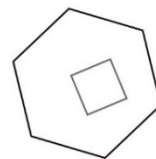
A



B



C



D

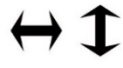


E

28)




A



B



C



D



E

29)



A



B



C

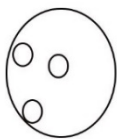


D

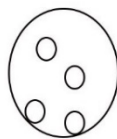


E

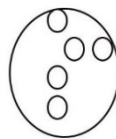
30)



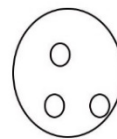
A



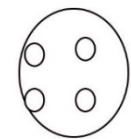
B



C



D

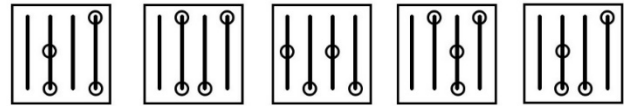


E

SECTION 4: – SERIES

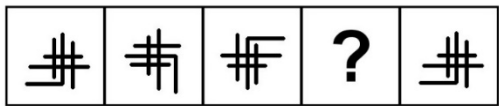
Which of the five shapes should complete the series on the left?

31)



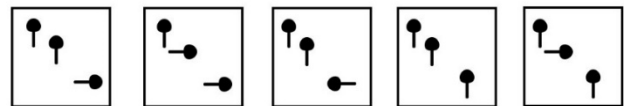
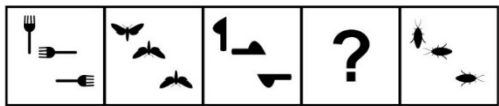
A B C D E

32)



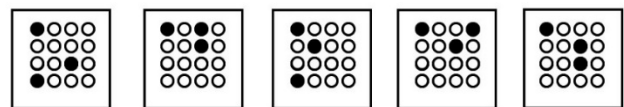
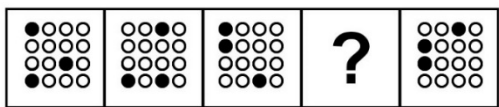
A B C D E

33)



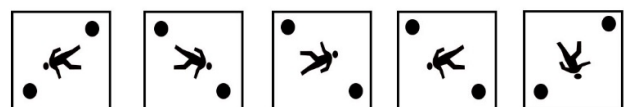

A B C D E

34)



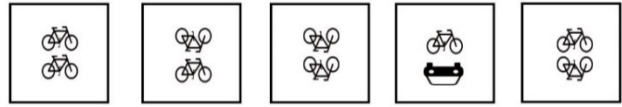
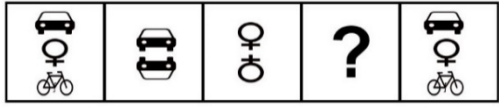
A B C D E

35)



A B C D E

36)



A

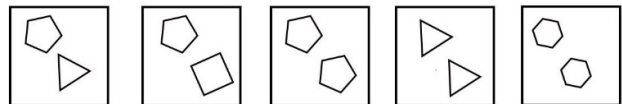
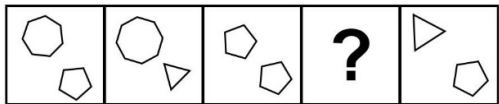
B

C

D

E

37)



A

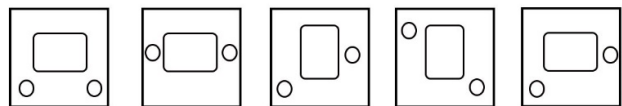
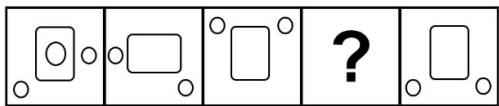
B

C

D

E

38)



A

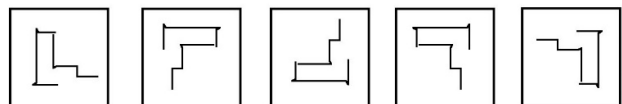
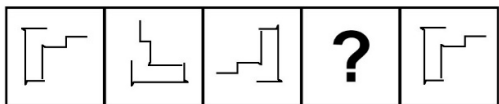
B

C

D

E

39)



A

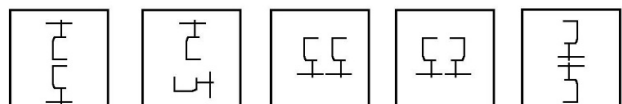
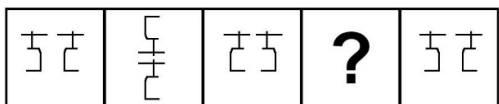
B

C

D

E

40)



A

B

C

D

E

End of test.